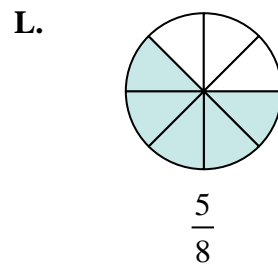
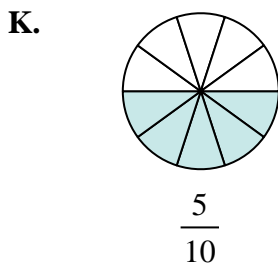
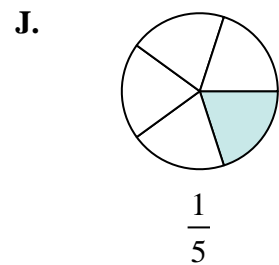
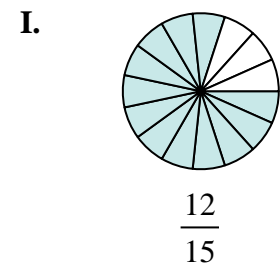
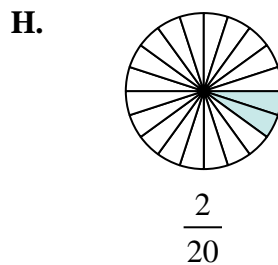
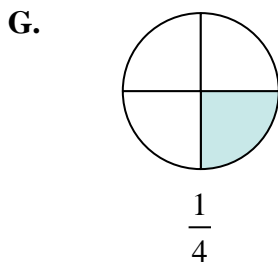
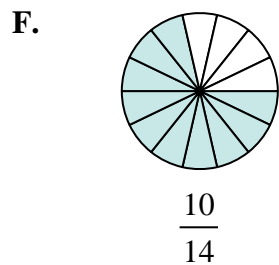
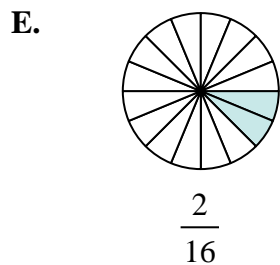
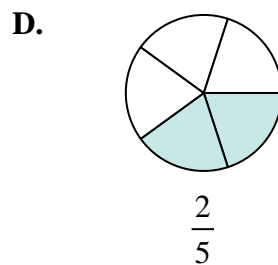
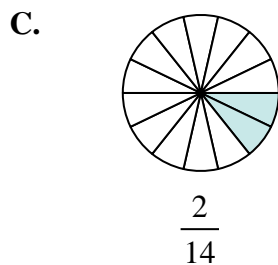
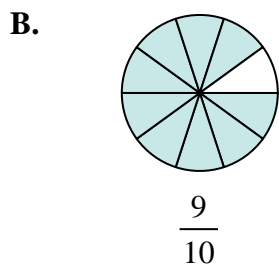
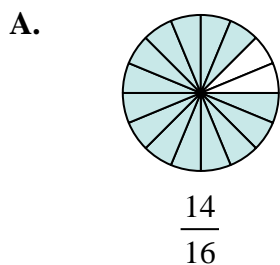
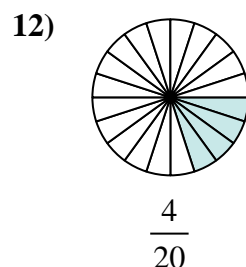
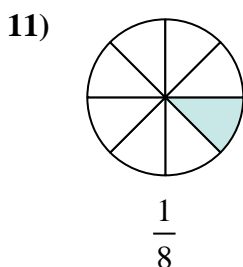
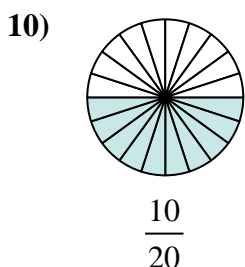
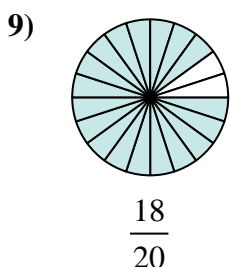
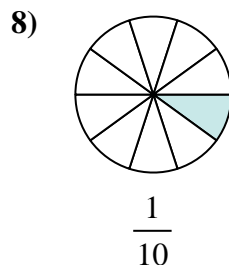
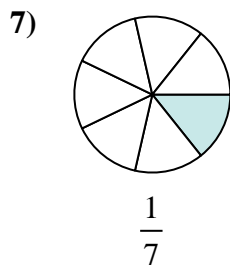
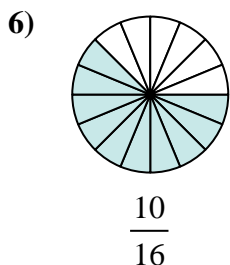
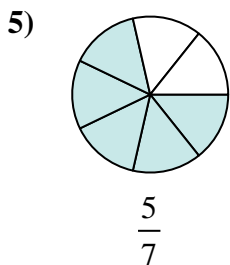
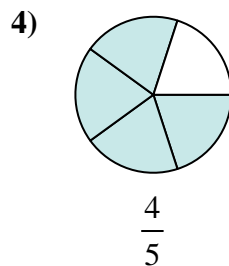
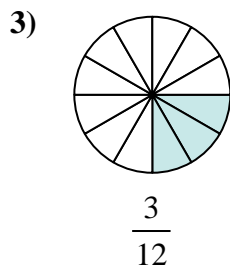
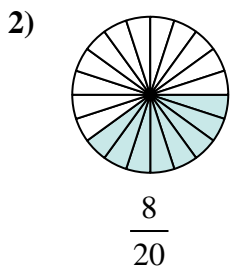
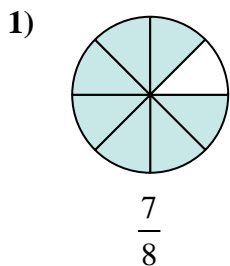




Determine which letter best represents an equivalent fraction.

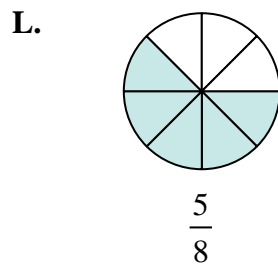
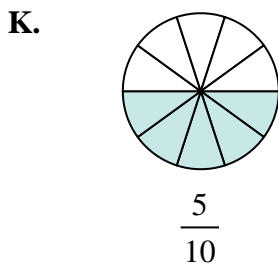
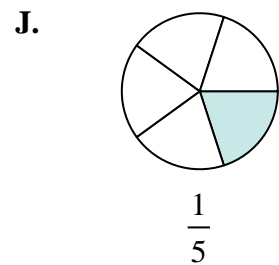
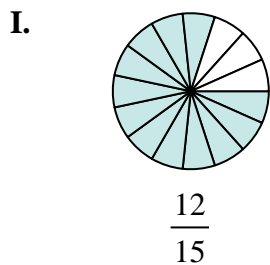
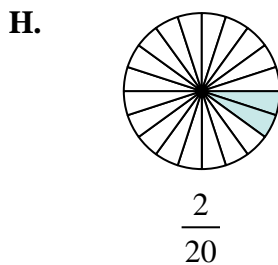
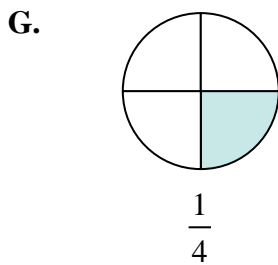
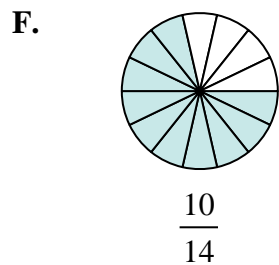
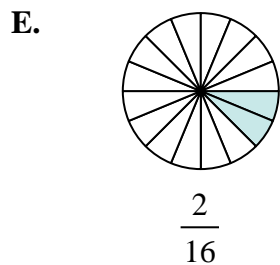
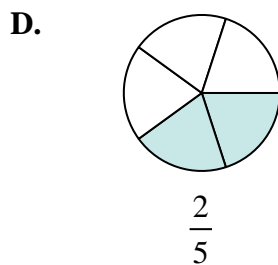
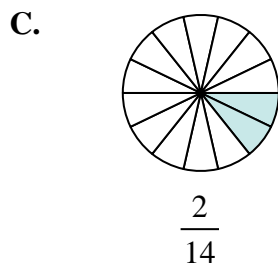
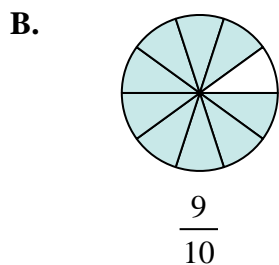
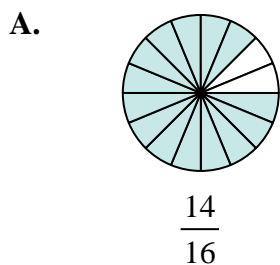
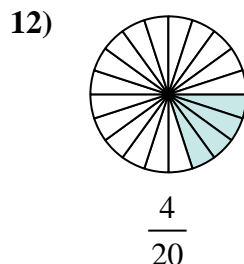
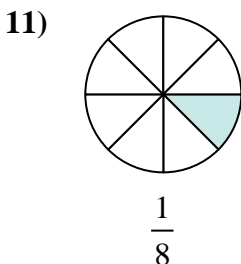
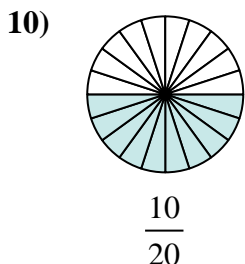
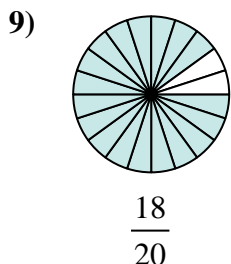
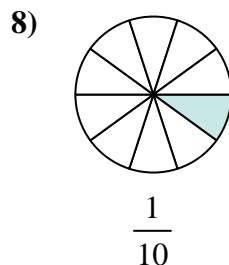
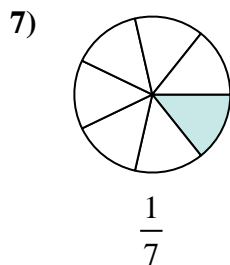
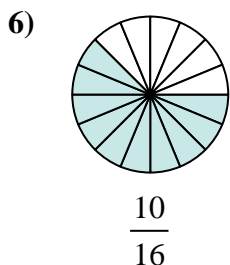
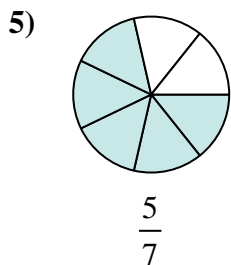
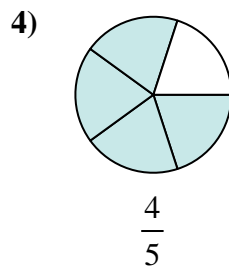
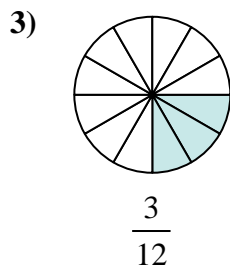
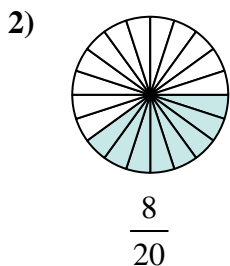
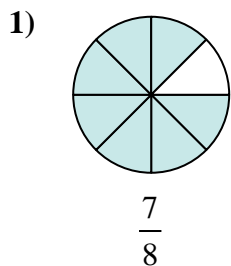
**Answers**



1. \_\_\_\_\_
2. \_\_\_\_\_
3. \_\_\_\_\_
4. \_\_\_\_\_
5. \_\_\_\_\_
6. \_\_\_\_\_
7. \_\_\_\_\_
8. \_\_\_\_\_
9. \_\_\_\_\_
10. \_\_\_\_\_
11. \_\_\_\_\_
12. \_\_\_\_\_



Determine which letter best represents an equivalent fraction.



**Answers**

1. **A**

2. **D**

3. **G**

4. **I**

5. **F**

6. **L**

7. **C**

8. **H**

9. **B**

10. **K**

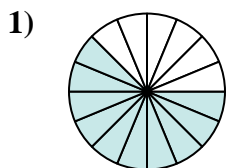
11. **E**

12. **J**

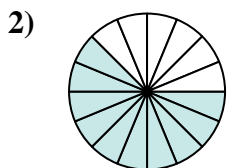


Determine which letter best represents an equivalent fraction.

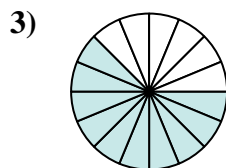
**Answers**



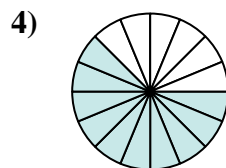
$$\frac{10 \times 2}{16 \times 2}$$



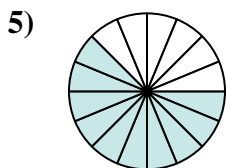
$$\frac{10 \times 2}{16 \times 2}$$



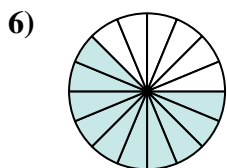
$$\frac{10 \times 2}{16 \times 2}$$



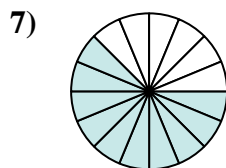
$$\frac{10 \times 2}{16 \times 2}$$



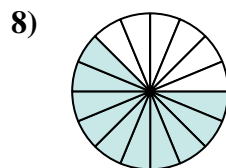
$$\frac{10 \times 2}{16 \times 2}$$



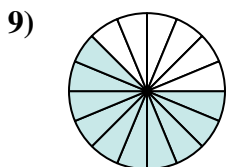
$$\frac{10 \times 2}{16 \times 2}$$



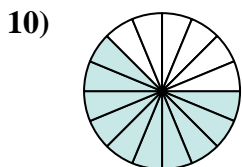
$$\frac{10 \times 2}{16 \times 2}$$



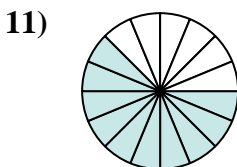
$$\frac{10 \times 2}{16 \times 2}$$



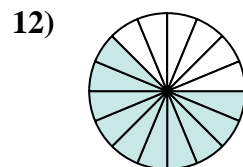
$$\frac{10 \times 2}{16 \times 2}$$



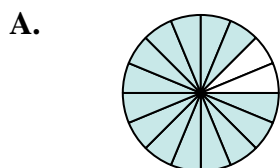
$$\frac{10 \times 2}{16 \times 2}$$



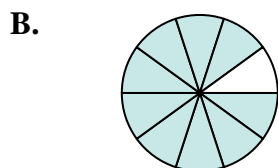
$$\frac{10 \times 2}{16 \times 2}$$



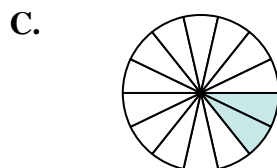
$$\frac{10 \times 2}{16 \times 2}$$



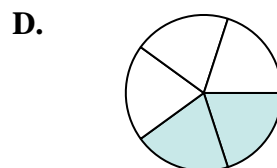
$$\frac{14}{16}$$



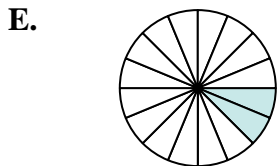
$$\frac{9}{10}$$



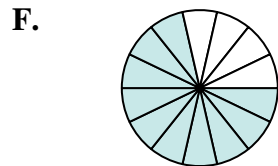
$$\frac{2}{14}$$



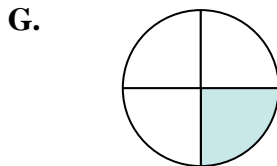
$$\frac{2}{5}$$



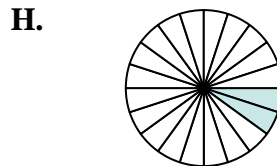
$$\frac{2}{16}$$



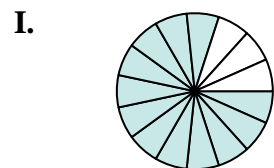
$$\frac{10}{14}$$



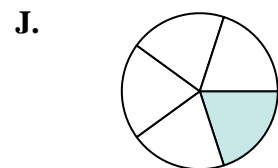
$$\frac{1}{4}$$



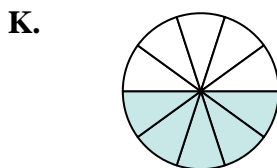
$$\frac{2}{20}$$



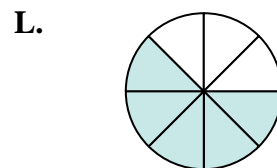
$$\frac{12}{15}$$



$$\frac{1}{5}$$



$$\frac{5}{10}$$



$$\frac{5}{8}$$

1. \_\_\_\_\_
2. \_\_\_\_\_
3. \_\_\_\_\_
4. \_\_\_\_\_
5. \_\_\_\_\_
6. \_\_\_\_\_
7. \_\_\_\_\_
8. \_\_\_\_\_
9. \_\_\_\_\_
10. \_\_\_\_\_
11. \_\_\_\_\_
12. \_\_\_\_\_